

SECTION 2

Reinforcement

Types of Volcanoes

Directions: Identify each form of volcano and then fill in the chart with the appropriate information about each form.

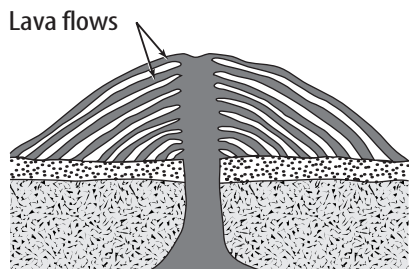


Figure 1

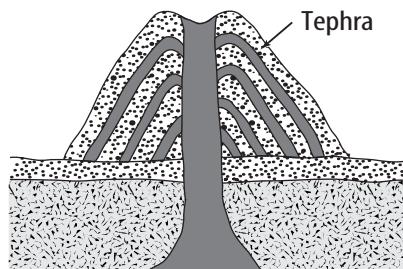


Figure 2

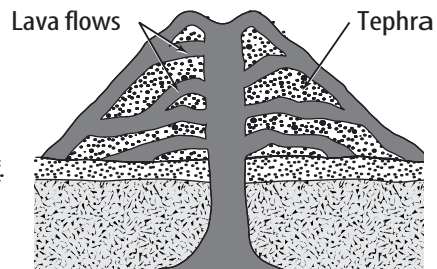


Figure 3

Type of volcano	Composition	Shape of volcano	Examples
1.			
2.			
3.			

Directions: Answer the following questions on the lines provided in complete sentences.

4. What is the relationship between the amount of gases in magma and the explosiveness of a volcanic eruption?

5. What is the relationship between the silica content of magma and the explosiveness of a volcanic eruption?
